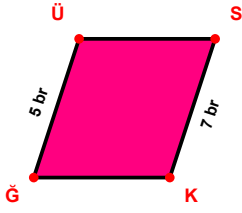
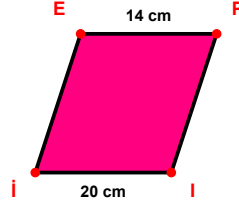


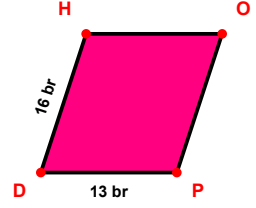
SORU: Aşağıdaki şekillerde verilen, kenar uzunlukları farklarını bulunuz.



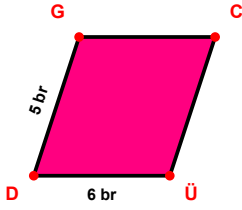
$$|SK| - |ĞÜ| = \dots\dots\dots$$



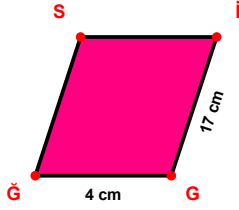
$$|İİ| - |EP| = \dots\dots\dots$$



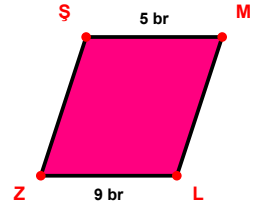
$$|DH| - |PD| = \dots\dots\dots$$



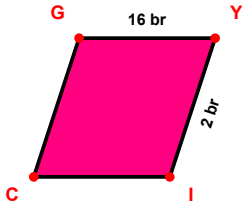
$$|ÜD| - |DG| = \dots\dots\dots$$



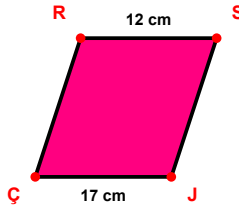
$$|İG| - |ĞĞ| = \dots\dots\dots$$



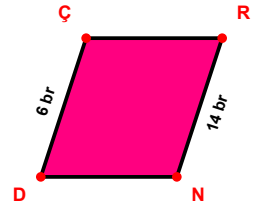
$$|LZ| - |ŞM| = \dots\dots\dots$$



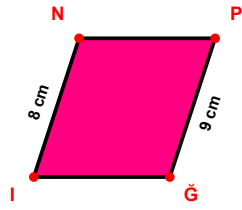
$$|GY| - |YI| = \dots\dots\dots$$



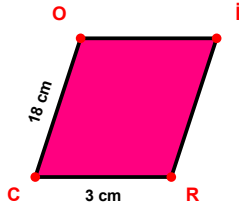
$$|JÇ| - |RS| = \dots\dots\dots$$



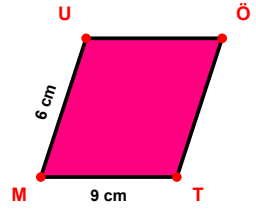
$$|RN| - |DÇ| = \dots\dots\dots$$



$$|PĞ| - |İN| = \dots\dots\dots$$

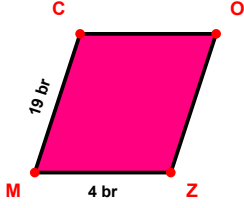


$$|CO| - |RC| = \dots\dots\dots$$

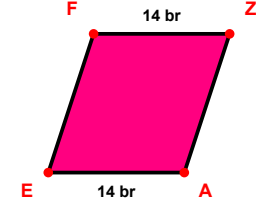


$$|TM| - |MU| = \dots\dots\dots$$

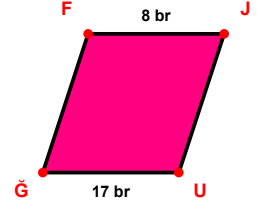
SORU: Aşağıdaki şekillerde verilen, kenar uzunlukları farklarını bulunuz.



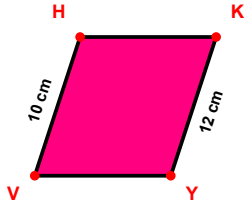
$$|MC| - |ZM| = \dots\dots$$



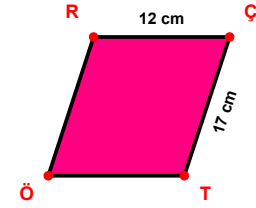
$$|AE| - |FZ| = \dots\dots$$



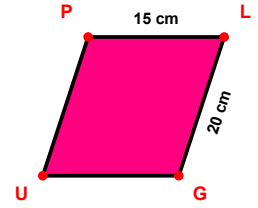
$$|UĞ| - |FJ| = \dots\dots$$



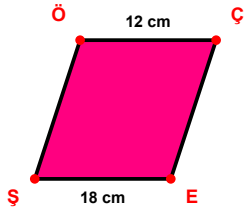
$$|KY| - |VH| = \dots\dots$$



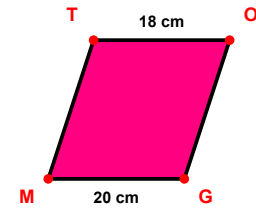
$$|ÇT| - |RC| = \dots\dots$$



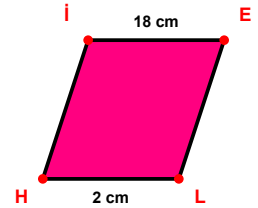
$$|LG| - |PL| = \dots\dots$$



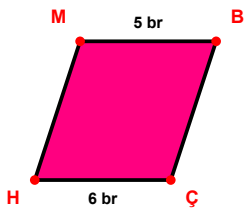
$$|EŞ| - |ÖÇ| = \dots\dots$$



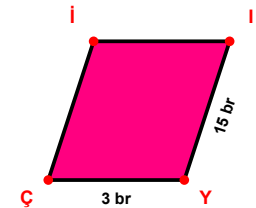
$$|GM| - |TO| = \dots\dots$$



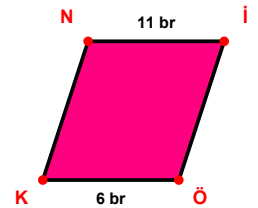
$$|İE| - |LH| = \dots\dots$$



$$|CH| - |MB| = \dots\dots$$



$$|İY| - |YÇ| = \dots\dots$$



$$|Nİ| - |ÖK| = \dots\dots$$

SÜREÇ ODAKLI DEĞERLENDİRME ÖLÇEĞİ

Doğru Sayısı: / 24

Öğretmen ilgili kutucuğu işaretler.

Geliştirilmeli (0-8)

İyi (9-14)

Çok İyi (15-20)

Mükemmel (21-24)

☐
☐
☐
☐

Hazırlayan:

Bu bölüme sınıfınızın ilgili kazanıma yönelik genel durumuna ilişkin gözlem ve izlenimlerinizi, öğrencilerinizin bu kazanımla ilgili öğrenme eksikliklerini ve bu eksikliklerin giderilmesi amacıyla yaptığınız/yapmayı planladığınız faaliyetleri not edebilirsiniz.

No	Adı - Soyadı	Toplam Puan	Değerlendirme
1			
2			
3			
4			
5			
6			
7			
8			
9			
10			
11			
12			
13			
14			
15			
16			
17			
18			
19			
20			
21			
22			
23			
24			
25			
26			
27			
28			
29			
30			
31			
32			
33			
34			
35			

Hazırlayan: